

1. Vypočítej:

$17 + 30 = \underline{\hspace{2cm}}$

$9 + 50 = \underline{\hspace{2cm}}$

$20 - 10 = \underline{\hspace{2cm}}$

$74 - 30 = \underline{\hspace{2cm}}$

$11 + 20 = \underline{\hspace{2cm}}$

$77 - 7 = \underline{\hspace{2cm}}$


$20 - 3 = \underline{\hspace{2cm}}$


$15 + 40 = \underline{\hspace{2cm}}$


$14 + 30 = \underline{\hspace{2cm}}$


$37 + 10 = \underline{\hspace{2cm}}$


2. Vypočítej:


$$\begin{array}{r} 15 \\ 34 \\ \hline \end{array}$$



$$\begin{array}{r} 28 \\ 31 \\ \hline \end{array}$$



$$\begin{array}{r} 18 \\ 40 \\ \hline \end{array}$$



$$\begin{array}{r} 35 \\ 31 \\ \hline \end{array}$$



$$\begin{array}{r} 15 \\ 74 \\ \hline \end{array}$$



$$\begin{array}{r} 17 \\ 31 \\ \hline \end{array}$$



$$\begin{array}{r} 65 \\ 31 \\ \hline \end{array}$$


$$\begin{array}{r} 11 \\ 14 \\ \hline \end{array}$$


$$\begin{array}{r} 15 \\ 64 \\ \hline \end{array}$$


$$\begin{array}{r} 15 \\ 53 \\ \hline \end{array}$$


$$\begin{array}{r} 17 \\ 22 \\ \hline \end{array}$$


$$\begin{array}{r} 85 \\ 14 \\ \hline \end{array}$$


3. Dopln.

